


Draw and write about your favourite means of transport.



My favourite means of transport is

.....

It is because

.....

.....

.....







.....

teacherfiera.com™

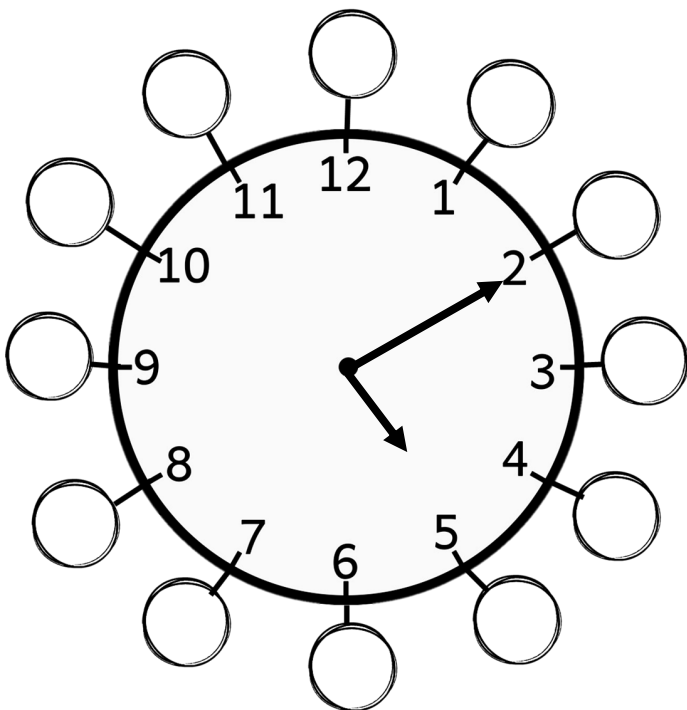
YEAR 4 MODULE 6

Write the correct answer

| | |
|------------------------------------|--|
| Keep both hands on the handlebars. | Don't stick your head out of the window. |
| Don't play in the street. | Use zebra crossing to cross the road. |
| Wear a helmet. | Fasten your seat belt. |

| | |
|--|--|
| 1.  | 2.  |
| 3.  | 4.  |
| 5.  | 6.  |

Write the correct minutes in the small circles.
Then write the time.

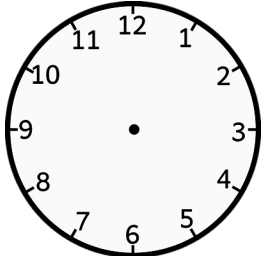
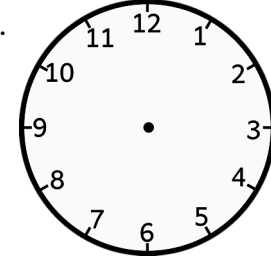
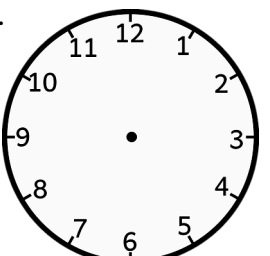
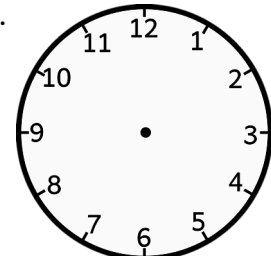
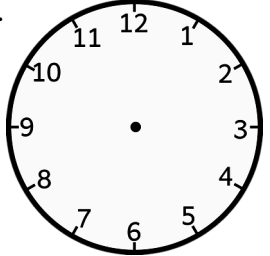
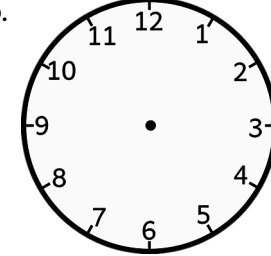
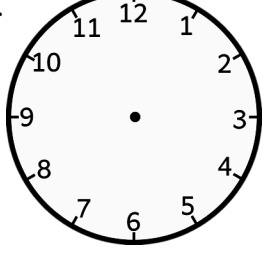
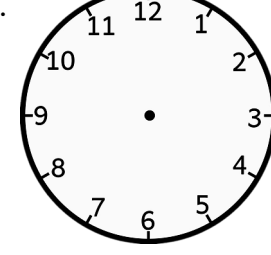


The time is _____

QUICK FACTS ABOUT CLOCKS

- Analog clocks use angles to tell time. These clocks have hands rotating around the clock's face.
- Digital clocks have LCD and LED displays and use numbers to show the time.
- The first mechanical clocks used moving gears that were used to progress the hour pointing hand.
- The term "o'clock" came into use in early 18th It is an abbreviation 'of the clock'.
- World's first minute hand was invented by a mathematician and Swiss clockmaker Jost Burgi in the year 1577.

Draw the clock hands.

| | |
|--|--|
| 1.  8 : 50 am | 2.  11 : 20 pm |
| 3.  4.30 pm | 4.  6 : 05 pm |
| 5.  10 : 00 am | 6.  12.00 pm |
| 7.  3.45 am | 8.  6.30 am |

Read and complete.

seat belt helmet handlebars
pavement window taxi
zebra crossing

| | |
|---|--|
| 1 | Always look both ways and then cross at the _____. |
| 2 | Don't stick your head out of the _____. |
| 3 | Tom went to work by _____ because there were no buses. |
| 4 | Always fasten your _____ in the car. |
| 5 | Kate rides her bike to school. She always keeps both hands on the _____ and wears a _____. |
| 6 | Walk on the _____. |